

Please check the examination details below before entering your candidate information

Candidate surname

Other names

Centre Number

Candidate Number

--	--	--	--	--

--	--	--	--	--

Pearson Edexcel International GCSE (9–1)

Friday 16 June 2023

Morning (Time: 1 hour 15 minutes)

Paper
reference

4PH1/2PR

Physics

UNIT: 4PH1

PAPER: 2PR

You must have:

Ruler, calculator, Equation Booklet (enclosed)

Total Marks

Instructions

- Use **black** ink or ball-point pen.
- If pencil is used for diagrams/sketches/graphs it must be dark (HB or B).
- **Fill in the boxes** at the top of this page with your name, centre number and candidate number.
- Answer **all** questions.
- Answer the questions in the spaces provided
– *there may be more space than you need.*
- Show all the steps in any calculations and state the units.

Information

- The total mark for this paper is 70.
- The marks for **each** question are shown in brackets
– *use this as a guide as to how much time to spend on each question.*

Advice

- Read each question carefully before you start to answer it.
- Write your answers neatly and in good English.
- Try to answer every question.
- Check your answers if you have time at the end.

Turn over ►

P71958RA

©2023 Pearson Education Ltd.

N:1/1/1/1/1/



P 7 1 9 5 8 R A 0 1 2 4



Pearson

FORMULAE

You may find the following formulae useful.

energy transferred = current \times voltage \times time

$$E = I \times V \times t$$

$$\text{frequency} = \frac{1}{\text{time period}}$$

$$f = \frac{1}{T}$$

$$\text{power} = \frac{\text{work done}}{\text{time taken}}$$

$$P = \frac{W}{t}$$

$$\text{power} = \frac{\text{energy transferred}}{\text{time taken}}$$

$$P = \frac{W}{t}$$

$$\text{orbital speed} = \frac{2\pi \times \text{orbital radius}}{\text{time period}}$$

$$v = \frac{2 \times \pi \times r}{T}$$

(final speed)² = (initial speed)² + (2 \times acceleration \times distance moved)

$$v^2 = u^2 + (2 \times a \times s)$$

pressure \times volume = constant

$$p_1 \times V_1 = p_2 \times V_2$$

$$\frac{\text{pressure}}{\text{temperature}} = \text{constant}$$

$$\frac{p_1}{T_1} = \frac{p_2}{T_2}$$

$$\text{force} = \frac{\text{change in momentum}}{\text{time taken}}$$

$$F = \frac{(mv - mu)}{t}$$

$$\frac{\text{change of wavelength}}{\text{wavelength}} = \frac{\text{velocity of a galaxy}}{\text{speed of light}}$$

$$\frac{\lambda - \lambda_0}{\lambda_0} = \frac{\Delta\lambda}{\lambda_0} = \frac{v}{c}$$

change in thermal energy = mass \times specific heat capacity \times change in temperature

$$\Delta Q = m \times c \times \Delta T$$

Where necessary, assume the acceleration of free fall, $g = 10 \text{ m/s}^2$.

DO NOT WRITE IN THIS AREA

DO NOT WRITE IN THIS AREA

DO NOT WRITE IN THIS AREA



Answer ALL questions.

1 (a) The boxes show some physical quantities and their units.

Draw a straight line from each physical quantity to its correct unit.

One has been done for you.

(3)

Physical quantity

Unit

velocity

metre per second squared (m/s^2)

force

watt (W)

power

newton (N)

moment

metre per second (m/s)

acceleration

newton metre (Nm)

(b) Some physical quantities are scalars and other physical quantities are vectors.

(i) State the difference between a scalar quantity and a vector quantity.

(1)

.....

.....

(ii) Give an example of a scalar quantity.

(1)

.....

(Total for Question 1 = 5 marks)

DO NOT WRITE IN THIS AREA

DO NOT WRITE IN THIS AREA

DO NOT WRITE IN THIS AREA



P 7 1 9 5 8 R A 0 3 2 4

2 This question is about different methods of generating electricity.

(a) Natural gas can be burned to generate electricity.

Name the energy store that decreases when natural gas is burned.

(1)

(b) Burning natural gas and the movement of water waves can both be used to generate electricity.

Discuss the advantages and disadvantages of these two methods of generating electricity.

(4)

(Total for Question 2 = 5 marks)



DO NOT WRITE IN THIS AREA

DO NOT WRITE IN THIS AREA

DO NOT WRITE IN THIS AREA

BLANK PAGE



P 7 1 9 5 8 R A 0 5 2 4

3 A cleaning product is applied to a car using a sponge pad.

The sponge pad is rubbed against the car to apply the cleaning product.



(Source: © Nor Gal/Shutterstock)

(a) Some parts of the car are made of metal and other parts are made of plastic.

The metal parts of the car are earthed.

Explain why the pad becomes charged when rubbing the plastic parts, but not when rubbing the metal parts.

(3)

.....

.....

.....

.....

.....

.....



(b) The sponge pad is held near a metal post that is connected to the ground.

The sponge pad discharges with a small spark through the air to the metal post.

(i) The sponge pad stores 5.0 mJ of energy in its electrostatic store.

The voltage between the sponge pad and the metal post is 6000V.

Calculate the charge transferred by the spark.

(3)

charge transferred = C

(ii) The small spark between the sponge pad and the metal post demonstrates that the sponge pad is charged.

Describe a different experiment that could demonstrate that the sponge pad is charged.

You may draw a diagram to support your answer.

(2)

.....

.....

.....

.....

.....

(Total for Question 3 = 8 marks)



- 4 The photograph shows a dummy during a test of the safety features of a car in a collision.



(Source: © fStop Images GmbH/Alamy Stock Photo)

Before the collision, the dummy in the car is travelling at a velocity of 14 m/s .

The dummy has a momentum of 1100 kg m/s .

- (a) (i) State the formula linking momentum, mass and velocity.

(1)

- (ii) Show that the mass of the dummy is approximately 80 kg .

(3)

DO NOT WRITE IN THIS AREA

DO NOT WRITE IN THIS AREA

DO NOT WRITE IN THIS AREA



DO NOT WRITE IN THIS AREA

DO NOT WRITE IN THIS AREA

DO NOT WRITE IN THIS AREA

(b) The dummy is brought to rest during the collision by a mean force of 15 kN.
Calculate the time taken for the dummy to be brought to rest in the collision.

(3)

time taken = s

(c) The car being tested is fitted with airbags.

Using ideas about momentum, explain how an airbag reduces the force experienced by the dummy in the collision.

(2)

.....

.....

.....

.....

.....

.....

.....

(Total for Question 4 = 9 marks)



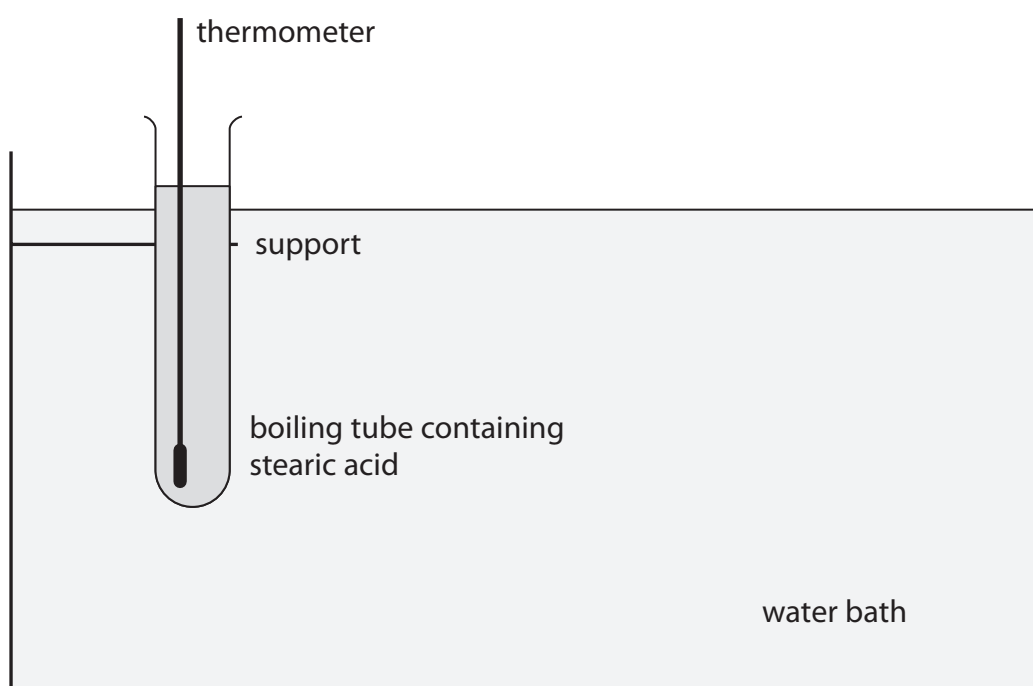
P 7 1 9 5 8 R A 0 9 2 4

5 This question is about specific heat capacity.

(a) State what is meant by the term **specific heat capacity**.

(3)

(b) The diagram shows a sample of solid stearic acid being heated in a boiling tube using a water bath.



The mass of stearic acid in the boiling tube is 58 g.

When the boiling tube is placed in the water bath, the temperature of the stearic acid increases from 21 °C to 37 °C. The stearic acid does not melt.

As the temperature of the stearic acid increases, an additional 3500 J of energy needs to be transferred electrically to the water bath.

- (i) Using this data, show that the specific heat capacity of the solid stearic acid is approximately 4 J/g °C.

(3)

- (ii) The true value for the specific heat capacity of solid stearic acid is 2.3 J/g °C.

Give a reason for the difference between the value in (i) and the true value.

(1)

.....

.....

.....

(Total for Question 5 = 7 marks)

DO NOT WRITE IN THIS AREA

DO NOT WRITE IN THIS AREA

DO NOT WRITE IN THIS AREA



DO NOT WRITE IN THIS AREA

DO NOT WRITE IN THIS AREA

DO NOT WRITE IN THIS AREA

BLANK PAGE



6 This question is about electromagnetism.

(a) Diagram 1 shows the magnetic field around a straight section of copper wire.

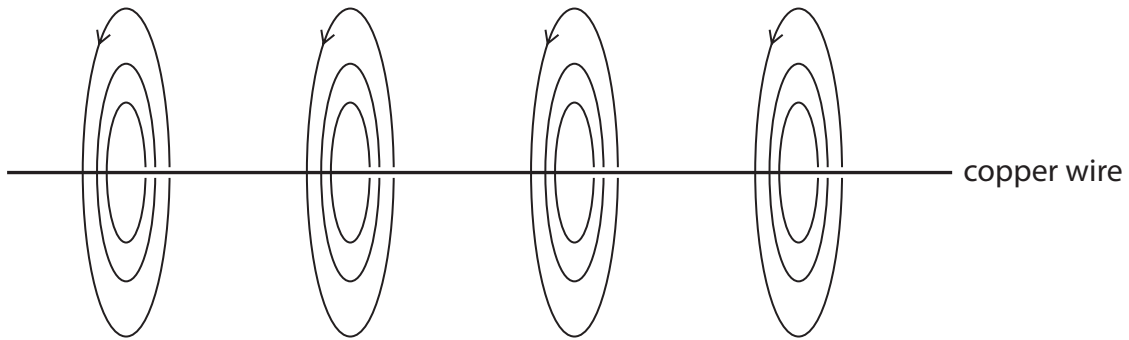


Diagram 1

Explain why the copper wire has the magnetic field shown in the diagram.

(2)

.....

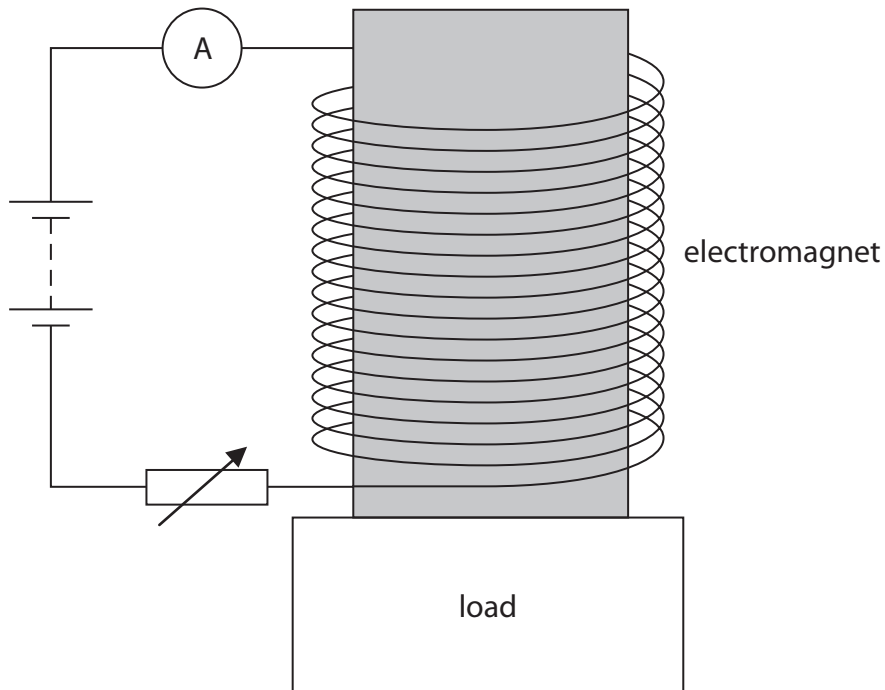
.....

.....

.....

(b) A student investigates how the strength of an electromagnet varies with the current in the electromagnet.

The diagram shows their apparatus.



This is the student's method.

- switch on the electromagnet at its maximum current
- place a load of 100 g so that it is held above the floor by the electromagnet
- slowly reduce the current in the electromagnet until the load falls from the electromagnet
- record the current at which the load falls
- record the current at which the same load falls two more times

Repeat the method for loads of different masses.

- (i) Suggest a suitable safety precaution for the student's investigation.

(1)

- (ii) The table shows the student's results.

Mass of load in g	Current at which the load falls in A			
	1	2	3	Mean
100	0.28	0.31	0.31	0.30
200	0.60	0.57	0.57	0.58
300	0.91	0.90	0.86	0.89
400	1.19	1.23	1.27	1.23
500	1.45	1.57	1.48	1.50
600	1.79	1.84	1.87	

Calculate the mean current when the mass of the load was 600 g.

Give your answer to a suitable number of significant figures.

(2)

mean current = A



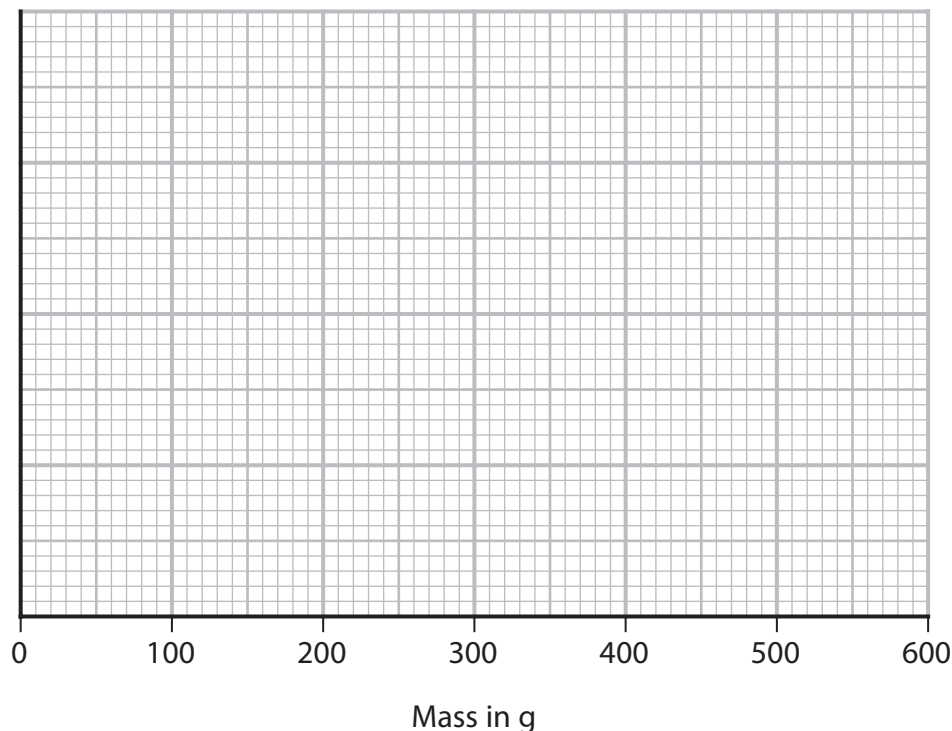
(iii) On the grid, plot a graph of the mean current against the mass of the load.

The scale for the mass axis has been done for you.

(3)

(iv) Draw the line of best fit.

(1)



(v) The student predicts that a load of 1.0 kg will fall when the current in the electromagnet is 3.0 A.

Comment on the student's prediction.

(3)

.....

.....

.....

.....

.....

.....

.....

.....

.....

.....

(Total for Question 6 = 12 marks)

DO NOT WRITE IN THIS AREA

DO NOT WRITE IN THIS AREA

DO NOT WRITE IN THIS AREA



7 This question is about sound waves.

(a) The table gives the frequencies of some different sound waves.

Place ticks (✓) in the table to show which sound waves can be heard by humans.

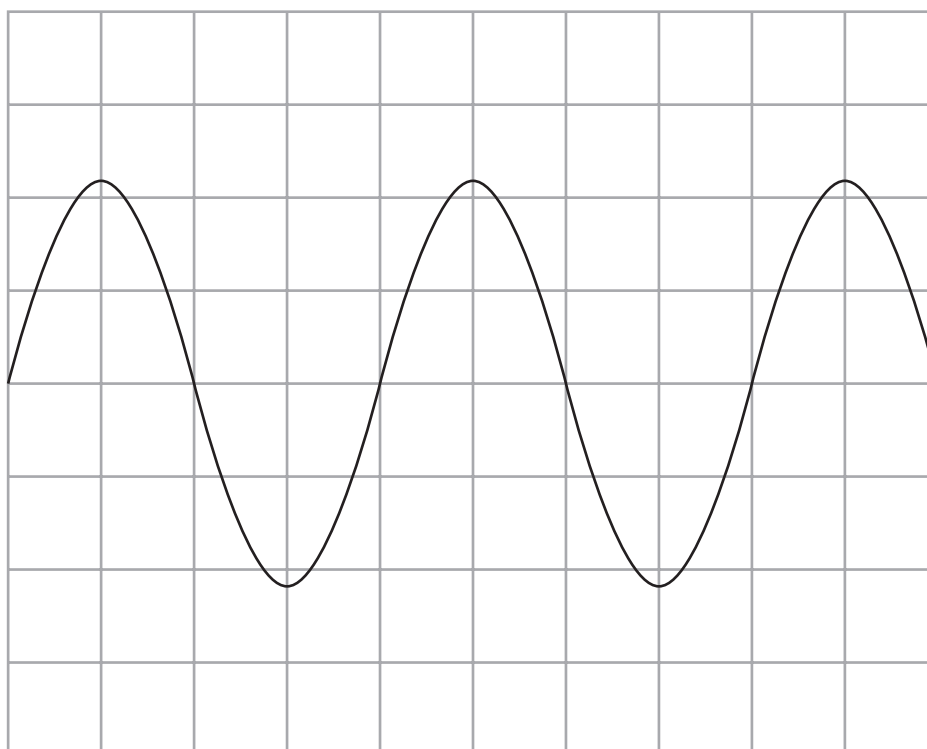
(2)

Sound wave	Frequency in Hz	Can be heard by humans
A	10	
B	30	
C	500	
D	2000	
E	10 000	
F	25 000	

(b) The diagram shows the screen of an oscilloscope when a sound wave is detected.

Add to the diagram by drawing the trace of another sound wave that has a lower pitch and is quieter than the sound wave shown.

(2)



- (c) The speed of sound in air varies with temperature.

A student finds a formula in a textbook that links the speed of sound waves in air to the temperature of the air, measured in kelvin.

$$\text{speed of sound in air} = (0.606 \times \text{temperature in kelvin}) + 166$$

- (i) Calculate the speed of sound when the air temperature is 46°C .

(2)

speed of sound = m/s

- (ii) Calculate the wavelength of a sound wave with a frequency of $15\,000\text{ Hz}$ when the air temperature is 46°C .

(3)

wavelength = m

(Total for Question 7 = 9 marks)



8 This question is about stars.

(a) The table gives some information about four stars.

Star	Mass in solar masses	Colour	Absolute magnitude
A	0.7	orange	+7.5
B	1.0	yellow	+4.8
C	2.0	blue	+1.4
D	17.1	blue	-16.8

(i) Star C is much more powerful than star A.

Stars A and C appear to have the same brightness when viewed from Earth.

Suggest how this is possible.

(1)

(ii) Using information from the table, explain which star is in the supernova stage of its evolution.

(3)



(b) Explain how a main sequence star evolves into a supernova.

(3)

DO NOT WRITE IN THIS AREA

DO NOT WRITE IN THIS AREA

DO NOT WRITE IN THIS AREA

Handwriting practice area consisting of ten horizontal dotted lines.



(c) Astronomers have used supernovas in distant galaxies to investigate the expansion of the universe.

- (i) Light emitted from a supernova at a wavelength of 7.774×10^{-7} m was detected at Earth with a wavelength of 7.780×10^{-7} m.

Calculate the speed at which the galaxy containing this supernova was moving away from the Earth.

[speed of light = 3.0×10^8 m/s]

(4)

speed = m/s



- (ii) The astronomers investigated supernovas that showed a red-shift in the wavelengths detected in different galaxies.

The astronomers discovered that the red-shifted light detected from supernovas in nearby galaxies had shorter wavelengths than the red-shifted light detected from supernovas in galaxies further away.

Explain how this discovery supports the Big Bang theory.

(4)

.....

.....

.....

.....

.....

.....

.....

.....

.....

.....

.....

.....

.....

.....

.....

.....

.....

.....

.....

.....

.....

.....

(Total for Question 8 = 15 marks)

TOTAL FOR PAPER = 70 MARKS

DO NOT WRITE IN THIS AREA

DO NOT WRITE IN THIS AREA

DO NOT WRITE IN THIS AREA



DO NOT WRITE IN THIS AREA

DO NOT WRITE IN THIS AREA

DO NOT WRITE IN THIS AREA

BLANK PAGE



DO NOT WRITE IN THIS AREA

DO NOT WRITE IN THIS AREA

DO NOT WRITE IN THIS AREA

BLANK PAGE



DO NOT WRITE IN THIS AREA

DO NOT WRITE IN THIS AREA

DO NOT WRITE IN THIS AREA

BLANK PAGE



Pearson Edexcel International GCSE (9–1)

Friday 16 June 2023

Morning (Time: 1 hour 15 minutes)

Paper
reference

4PH1/2PR

Physics

UNIT: 4PH1

PAPER: 2PR

Equation Booklet

Do not return this Booklet with the question paper.

Turn over ►

P71958RA

©2023 Pearson Education Ltd.

N:1/1/1/1/1/



P 7 1 9 5 8 R A



Pearson

These equations may be required for both International GCSE Physics (4PH1) and International GCSE Combined Science (4SD0) papers.

1. Forces and Motion

$$\text{average speed} = \frac{\text{distance moved}}{\text{time taken}}$$

$$\text{acceleration} = \frac{\text{change in velocity}}{\text{time taken}} \qquad a = \frac{(v-u)}{t}$$

$$(\text{final speed})^2 = (\text{initial speed})^2 + (2 \times \text{acceleration} \times \text{distance moved})$$

$$v^2 = u^2 + (2 \times a \times s)$$

$$\text{force} = \text{mass} \times \text{acceleration} \qquad F = m \times a$$

$$\text{weight} = \text{mass} \times \text{gravitational field strength} \qquad W = m \times g$$

2. Electricity

$$\text{power} = \text{current} \times \text{voltage} \qquad P = I \times V$$

$$\text{energy transferred} = \text{current} \times \text{voltage} \times \text{time} \qquad E = I \times V \times t$$

$$\text{voltage} = \text{current} \times \text{resistance} \qquad V = I \times R$$

$$\text{charge} = \text{current} \times \text{time} \qquad Q = I \times t$$

$$\text{energy transferred} = \text{charge} \times \text{voltage} \qquad E = Q \times V$$

3. Waves

$$\text{wave speed} = \text{frequency} \times \text{wavelength} \qquad v = f \times \lambda$$

$$\text{frequency} = \frac{1}{\text{time period}} \qquad f = \frac{1}{T}$$

$$\text{refractive index} = \frac{\sin(\text{angle of incidence})}{\sin(\text{angle of refraction})} \qquad n = \frac{\sin i}{\sin r}$$

$$\sin(\text{critical angle}) = \frac{1}{\text{refractive index}} \qquad \sin c = \frac{1}{n}$$



4. Energy resources and energy transfers

$$\text{efficiency} = \frac{\text{useful energy output}}{\text{total energy output}} \times 100\%$$

$$\text{work done} = \text{force} \times \text{distance moved} \quad W = F \times d$$

$$\text{gravitational potential energy} = \text{mass} \times \text{gravitational field strength} \times \text{height}$$

$$GPE = m \times g \times h$$

$$\text{kinetic energy} = \frac{1}{2} \times \text{mass} \times \text{speed}^2 \quad KE = \frac{1}{2} \times m \times v^2$$

$$\text{power} = \frac{\text{work done}}{\text{time taken}} \quad P = \frac{W}{t}$$

5. Solids, liquids and gases

$$\text{density} = \frac{\text{mass}}{\text{volume}} \quad \rho = \frac{m}{V}$$

$$\text{pressure} = \frac{\text{force}}{\text{area}} \quad p = \frac{F}{A}$$

$$\text{pressure difference} = \text{height} \times \text{density} \times \text{gravitational field strength}$$

$$p = h \times \rho \times g$$

$$\frac{\text{pressure}}{\text{temperature}} = \text{constant} \quad \frac{p_1}{T_1} = \frac{p_2}{T_2}$$

$$\text{pressure} \times \text{volume} = \text{constant} \quad p_1 \times V_1 = p_2 \times V_2$$

8. Astrophysics

$$\text{orbital speed} = \frac{2 \times \pi \times \text{orbital radius}}{\text{time period}} \quad v = \frac{2 \times \pi \times r}{T}$$

The equations on the following page will only be required for International GCSE Physics.

These additional equations may be required in International GCSE Physics papers 2P and 2PR.

1. Forces and Motion

momentum = mass \times velocity $p = m \times v$

force = $\frac{\text{change in momentum}}{\text{time taken}}$ $F = \frac{(mv - mu)}{t}$

moment = force \times perpendicular distance from the pivot

5. Solids, liquids and gases

change in thermal energy = mass \times specific heat capacity \times change in temperature

$$\Delta Q = m \times c \times \Delta T$$

6. Magnetism and electromagnetism

relationship between input and output voltages for a transformer

$$\frac{\text{input (primary) voltage}}{\text{output (secondary) voltage}} = \frac{\text{primary turns}}{\text{secondary turns}}$$

input power = output power

$$V_p I_p = V_s I_s$$

for 100% efficiency

8. Astrophysics

$$\frac{\text{change in wavelength}}{\text{reference wavelength}} = \frac{\text{velocity of a galaxy}}{\text{speed of light}} \quad \frac{\lambda - \lambda_0}{\lambda_0} = \frac{\Delta \lambda}{\lambda_0} = \frac{v}{c}$$

END OF EQUATION LIST

